
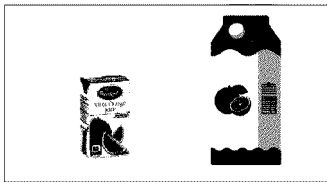

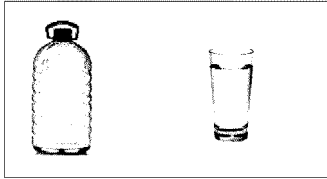


Time: 10 Minutes	Paper Math 2	Total Marks: 10
-------------------------	---------------------	------------------------

4th Month, 3rd Week, 1st Day	Syllabus: Page No. 114
------------------------------	-------------------------------

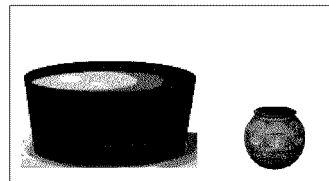
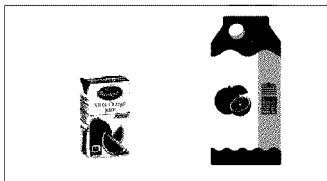

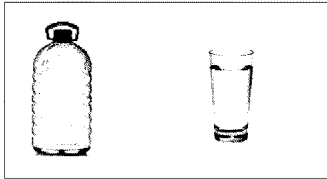
Tick (✓) the container which has more capacity. (10)
جس کی گنجائش زیادہ ہو اس پر (✓) لگائیں۔



Time: 10 Minutes	Paper Math 2	Total Marks: 10
-------------------------	---------------------	------------------------

4th Month, 2nd Week, 1st Day	Syllabus: Page No. 114
------------------------------	-------------------------------

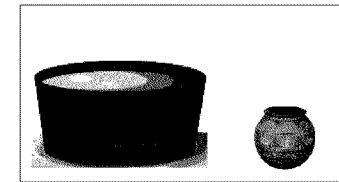

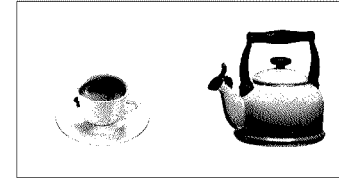
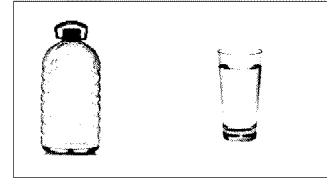
Tick (✓) the container which has more capacity. (10)
جس کی گنجائش زیادہ ہو اس پر (✓) لگائیں۔



Time: 10 Minutes	Paper Math 2	Total Marks: 10
-------------------------	---------------------	------------------------

4th Month, 3rd Week, 1st Day	Syllabus: Page No. 114
------------------------------	-------------------------------

Tick (✓) the container which has more capacity. (10)
جس کی گنجائش زیادہ ہو اس پر (✓) لگائیں۔



Time: 10 Minutes	Paper Math 2	Total Marks: 10
-------------------------	---------------------	------------------------

4th Month, 2nd Week, 1st Day	Syllabus: Page No. 114
------------------------------	-------------------------------

Tick (✓) the container which has more capacity. (10)
جس کی گنجائش زیادہ ہو اس پر (✓) لگائیں۔

